

Name _____

139

one hundred thirty-nine

Write how many hundreds, tens, and ones are in the number 139.

_____ hundreds _____ tens _____ ones

Write 139 in expanded form.

_____ + _____ + _____ = 139

Fill in the equations below.

$139 + 1 = \underline{\quad}$


$139 - 1 = \underline{\quad}$

$139 + 10 = \underline{\quad}$

$139 - 10 = \underline{\quad}$

Write 139 as hundreds, tens, & ones.

hundreds	tens	ones



Write each number in its expanded form.

194	
128	
160	
135	
171	
144	

Fill in the symbol to make each equation true.


$140 \bigcirc 139$

$110 \bigcirc 111$

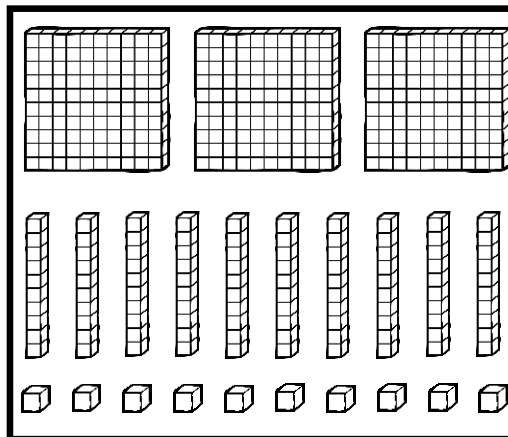
$172 \bigcirc 127$

$199 \bigcirc 189$

$139 \bigcirc 159$



Color the base ten blocks to show 139.



Circle the value of the underlined number.

<u>1</u> 66	600	60	6
<u>1</u> 52	100	10	1
18 <u>4</u>	400	40	4
1 <u>8</u> 9	800	80	8
<u>1</u> 45	400	40	4