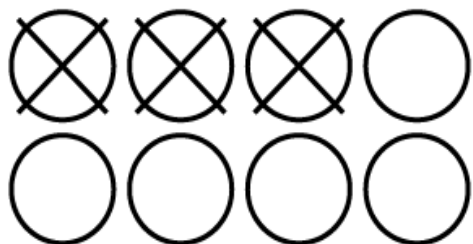


Name: _____


Subtraction

a.




$$8 - 3 = \underline{\quad}$$

b.



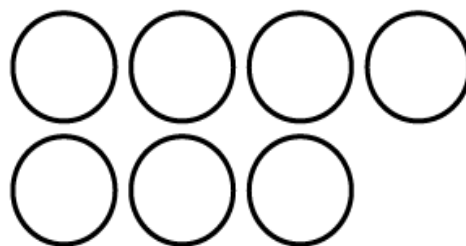
$$9 - 6 = \underline{\quad}$$

c.



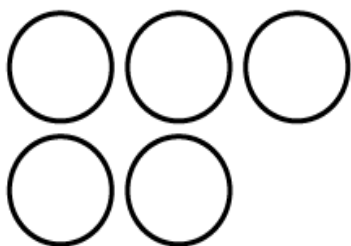
$$6 - 2 = \underline{\quad}$$

d.



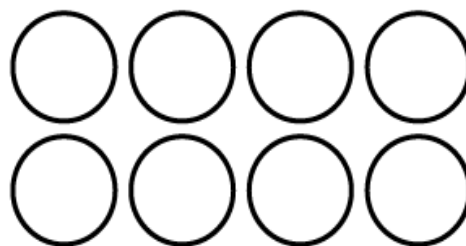
$$7 - 1 = \underline{\quad}$$

e.



$$5 - 3 = \underline{\quad}$$

f.



$$8 - 7 = \underline{\quad}$$