





Name _____

Let's Recycle!

Count the recyclable items and color in one square in the graph for each.



plastic jugs 										
aluminum cans 										
newspapers 										
	1	2	3	4	5	6	7	8	9	10

Write answers to the questions.

1 Are there more newspapers or plastic jugs? _____

2 Are there more aluminum cans or newspapers? _____

3 Which item is there the least of? _____